

One-Digit Plus One-Digit

Time : _____

Instructions: Add the numbers together and write the sum inside the box.

Score : _____

1)
$$\begin{array}{r} 5 \\ + 2 \\ \hline \end{array}$$

2)
$$\begin{array}{r} 4 \\ + 4 \\ \hline \end{array}$$

3)
$$\begin{array}{r} 8 \\ + 3 \\ \hline \end{array}$$

4)
$$\begin{array}{r} 1 \\ + 5 \\ \hline \end{array}$$

5)
$$\begin{array}{r} 6 \\ + 3 \\ \hline \end{array}$$

6)
$$\begin{array}{r} 8 \\ + 1 \\ \hline \end{array}$$

7)
$$\begin{array}{r} 2 \\ + 6 \\ \hline \end{array}$$

8)
$$\begin{array}{r} 3 \\ + 2 \\ \hline \end{array}$$

9)
$$\begin{array}{r} 4 \\ + 5 \\ \hline \end{array}$$

10)
$$\begin{array}{r} 9 \\ + 1 \\ \hline \end{array}$$

11)
$$\begin{array}{r} 4 \\ + 5 \\ \hline \end{array}$$

12)
$$\begin{array}{r} 6 \\ + 3 \\ \hline \end{array}$$

13)
$$\begin{array}{r} 8 \\ + 2 \\ \hline \end{array}$$

14)
$$\begin{array}{r} 3 \\ + 2 \\ \hline \end{array}$$

15)
$$\begin{array}{r} 6 \\ + 4 \\ \hline \end{array}$$

16)
$$\begin{array}{r} 5 \\ + 3 \\ \hline \end{array}$$

17)
$$\begin{array}{r} 7 \\ + 3 \\ \hline \end{array}$$

18)
$$\begin{array}{r} 4 \\ + 2 \\ \hline \end{array}$$

19)
$$\begin{array}{r} 3 \\ + 5 \\ \hline \end{array}$$

20)
$$\begin{array}{r} 2 \\ + 7 \\ \hline \end{array}$$

Two-Digit Plus Two-Digit

Time : _____

Instructions: Add the numbers together and write the sum inside the box.

Score : _____

1) $\begin{array}{r} 16 \\ + 33 \\ \hline \end{array}$

2) $\begin{array}{r} 49 \\ + 40 \\ \hline \end{array}$

3) $\begin{array}{r} 31 \\ + 45 \\ \hline \end{array}$

4) $\begin{array}{r} 17 \\ + 71 \\ \hline \end{array}$

5) $\begin{array}{r} 28 \\ + 21 \\ \hline \end{array}$

6) $\begin{array}{r} 40 \\ + 44 \\ \hline \end{array}$

7) $\begin{array}{r} 48 \\ + 41 \\ \hline \end{array}$

8) $\begin{array}{r} 64 \\ + 25 \\ \hline \end{array}$

9) $\begin{array}{r} 75 \\ + 14 \\ \hline \end{array}$

10) $\begin{array}{r} 22 \\ + 35 \\ \hline \end{array}$

11) $\begin{array}{r} 65 \\ + 22 \\ \hline \end{array}$

12) $\begin{array}{r} 83 \\ + 15 \\ \hline \end{array}$

13) $\begin{array}{r} 36 \\ + 33 \\ \hline \end{array}$

14) $\begin{array}{r} 74 \\ + 15 \\ \hline \end{array}$

15) $\begin{array}{r} 37 \\ + 22 \\ \hline \end{array}$

16) $\begin{array}{r} 20 \\ + 60 \\ \hline \end{array}$

17) $\begin{array}{r} 72 \\ + 14 \\ \hline \end{array}$

18) $\begin{array}{r} 66 \\ + 23 \\ \hline \end{array}$

19) $\begin{array}{r} 76 \\ + 11 \\ \hline \end{array}$

20) $\begin{array}{r} 86 \\ + 13 \\ \hline \end{array}$

Three-Digit Plus Three-Digit

Time : _____

Instructions: Add the numbers together and write the sum inside the box.

Score : _____

1)
$$\begin{array}{r} + 413 \\ + 435 \\ \hline \end{array}$$

2)
$$\begin{array}{r} + 264 \\ + 204 \\ \hline \end{array}$$

3)
$$\begin{array}{r} + 456 \\ + 312 \\ \hline \end{array}$$

4)
$$\begin{array}{r} + 302 \\ + 354 \\ \hline \end{array}$$

5)
$$\begin{array}{r} + 612 \\ + 174 \\ \hline \end{array}$$

6)
$$\begin{array}{r} + 123 \\ + 242 \\ \hline \end{array}$$

7)
$$\begin{array}{r} + 726 \\ + 132 \\ \hline \end{array}$$

8)
$$\begin{array}{r} + 140 \\ + 214 \\ \hline \end{array}$$

9)
$$\begin{array}{r} + 313 \\ + 202 \\ \hline \end{array}$$

10)
$$\begin{array}{r} + 715 \\ + 221 \\ \hline \end{array}$$

11)
$$\begin{array}{r} + 261 \\ + 234 \\ \hline \end{array}$$

12)
$$\begin{array}{r} + 243 \\ + 322 \\ \hline \end{array}$$

Three-Digit Plus Three-Digit

Time : _____

Instructions: Add the numbers together and write the sum inside the box.

Score : _____

1)
$$\begin{array}{r} + 313 \\ + 332 \\ \hline \end{array}$$

2)
$$\begin{array}{r} + 264 \\ + 623 \\ \hline \end{array}$$

3)
$$\begin{array}{r} + 415 \\ + 412 \\ \hline \end{array}$$

4)
$$\begin{array}{r} + 202 \\ + 291 \\ \hline \end{array}$$

5)
$$\begin{array}{r} + 513 \\ + 143 \\ \hline \end{array}$$

6)
$$\begin{array}{r} + 325 \\ + 124 \\ \hline \end{array}$$

7)
$$\begin{array}{r} + 522 \\ + 141 \\ \hline \end{array}$$

8)
$$\begin{array}{r} + 130 \\ + 512 \\ \hline \end{array}$$

9)
$$\begin{array}{r} + 512 \\ + 252 \\ \hline \end{array}$$

10)
$$\begin{array}{r} + 514 \\ + 121 \\ \hline \end{array}$$

11)
$$\begin{array}{r} + 476 \\ + 201 \\ \hline \end{array}$$

12)
$$\begin{array}{r} + 341 \\ + 314 \\ \hline \end{array}$$

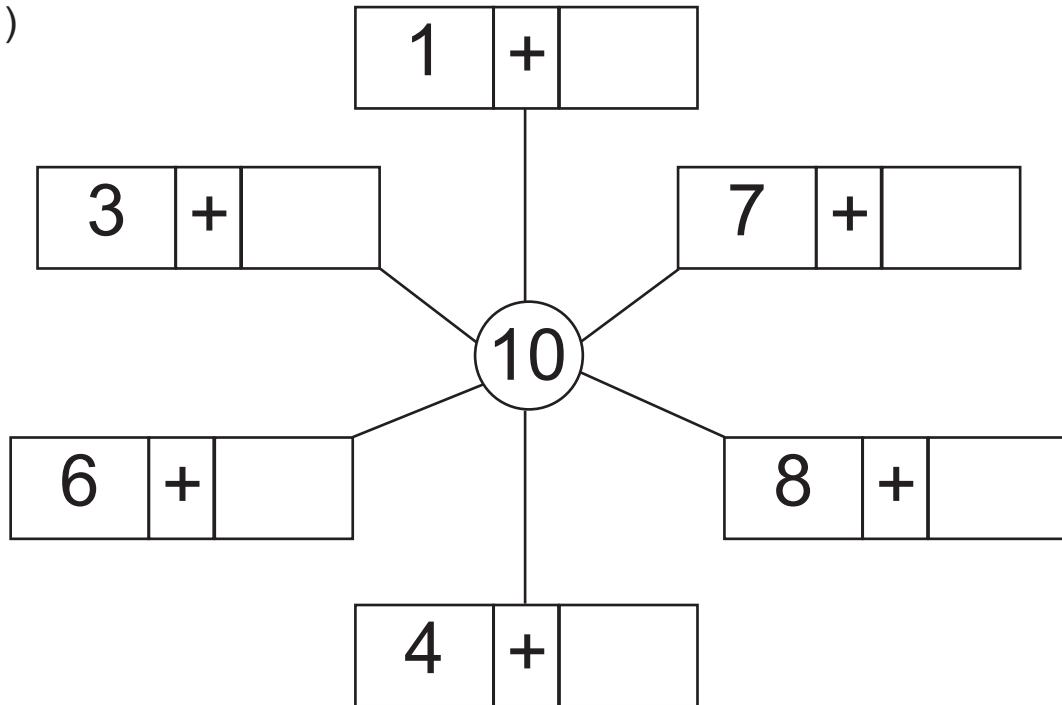
Bonus Worksheet - 1

Instructions: Find the second number in the equation that equals to the number inside the circle.

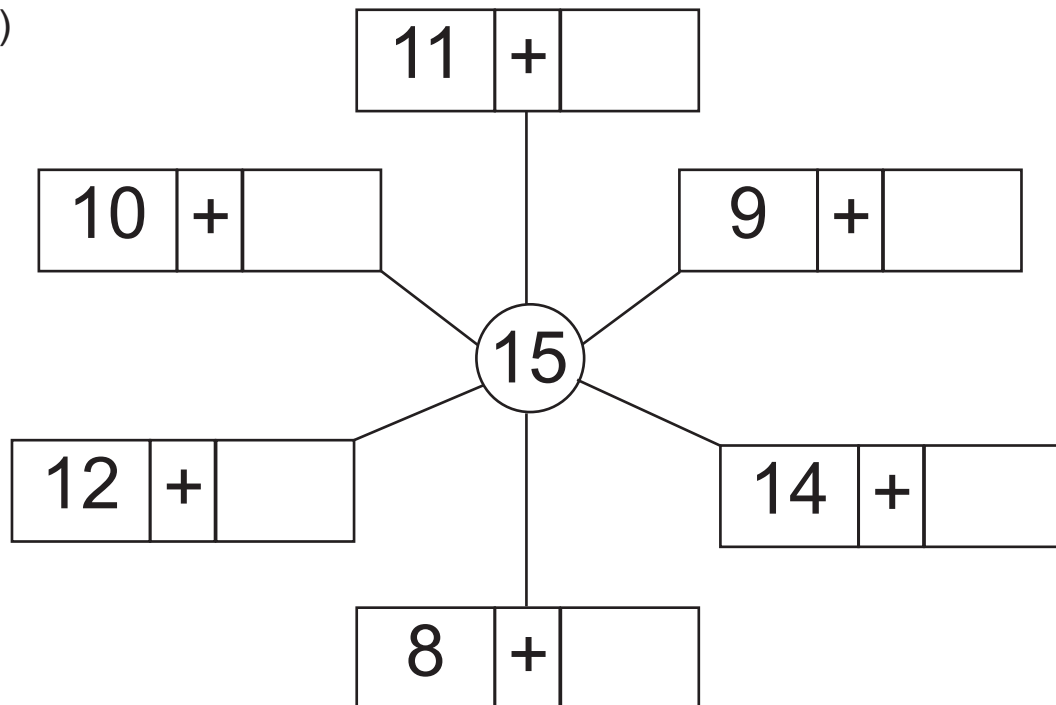
Time : _____

Score : _____

1)



2)



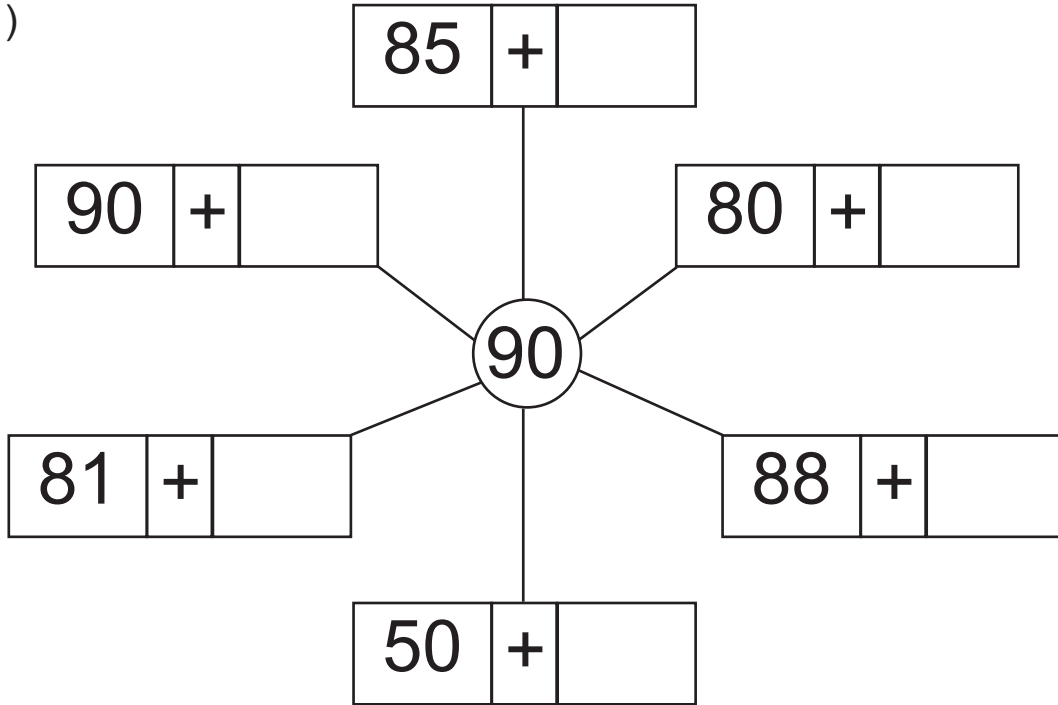
Bonus Worksheet - 9

Instructions: Find the second number in the equation that equals to the number inside the circle.

Time : _____

Score : _____

1)



2)

